

Review: Find the derivative.

$$f(x) = 5^{\csc x} \sqrt{x^3 - 7x} = (5^{\csc x}) (x^3 - 7x)^{1/2}$$

$$f'(x) = 5^{\csc x} \cdot \frac{1}{2} (x^3 - 7x)^{-1/2} \cdot (3x^2 - 7) + (x^3 - 7x)^{1/2} (5^{\csc x} \cdot \ln 5 \cdot (-\csc x \cot x))$$

$$e^{\infty} = \infty$$



$$\text{as } x \rightarrow \infty, e^x \rightarrow \infty$$

$$\text{as } x \rightarrow -\infty, e^x \rightarrow 0$$

$$e^{-\infty} = \frac{1}{e^{\infty}}$$

$$\frac{1}{\infty} = 0$$

$$\frac{c}{\infty} = 0$$

3.7 Optimization Problems

4. find 2 positive #s whose product is 192 & the sum of the first plus 3 times the second is a minimum.

$$xy = 192 \quad S(y) = \frac{192}{y} + 3y$$

$$S = x + 3y \quad S'(y) = -\frac{192}{y^2} + 3$$

$$\frac{1}{x} = x^{-1}$$

$$(x^{-1})' = -x^{-2} = -\frac{1}{x^2}$$

$$-\frac{192}{y^2} + 3 = 0$$

2 #'s:

$$-\frac{192}{y^2} = -3$$

$$192 = 3y^2$$

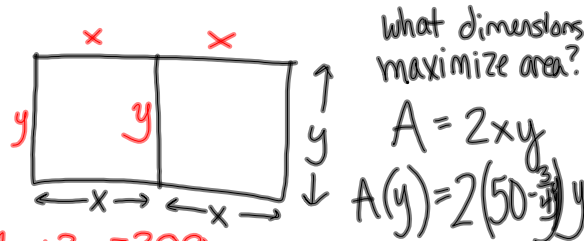
$$\frac{192}{3} = y^2$$

$$64 = y^2$$

$$8 = y$$

8 & 24

18. rancher has 200 ft of fence



$$4x + 3y = 200$$

$$x = \frac{200 - 3y}{4} = 50 - \frac{3}{4}y$$

$$A(y) = 100y - \frac{3}{2}y^2$$

$$A'(y) = 100 - 3y \quad y = \frac{100}{3}$$

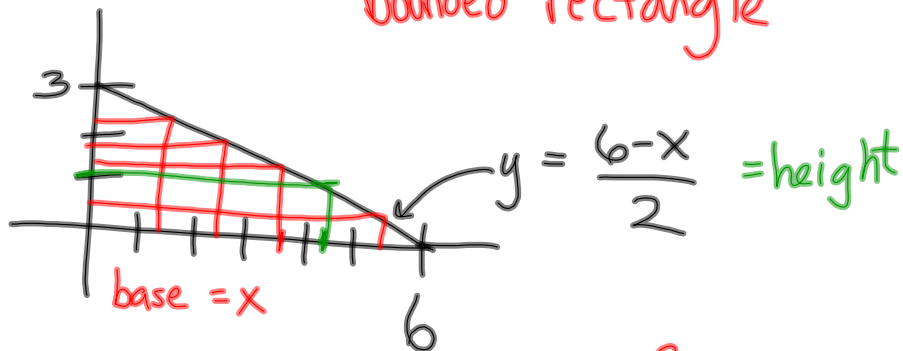
$$100 - 3y = 0$$

$$\frac{100}{3} = y$$

$$x = \frac{200 - 3(\frac{100}{3})}{4} = 25$$

$$y = \frac{100}{3} \text{ ft}; x = 25 \text{ ft}$$

24.

maximize area of
bounded rectangle

$$A = x \left(\frac{6-x}{2} \right) = 3x - \frac{x^2}{2}$$

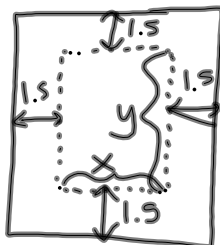
$$A' = 3 - x$$

$$3 - x = 0$$

$$x = 3$$

$$\frac{6-3}{2} = \boxed{\frac{3}{2}}$$

30.



$$xy = 36 \quad y = \frac{36}{x}$$

$$A = (x+3)(y+3)$$

$$= (x+3)\left(\frac{36}{x} + 3\right)$$

$$A(x) = 36 + 3x + 3\left(\frac{36}{x}\right) + 9$$

$$A'(x) = 3 + 3(36) \cdot \frac{-1}{x^2} = 0$$

$$13 = 3(36) \cdot \frac{1}{x^2}$$

$$x^2 = 36$$

$$x = 6 \text{ in}$$

$$y = \frac{36}{6} = \boxed{6 \text{ in}}$$

36 in^2 of print
margins are $1\frac{1}{2}$ in
find page
dimensions that
use least amt.
of paper

3.7
3, 5, 17, 23, 29

